

























Qui est l'intrus ?

Pour chaque carte, il faut retrouver la fraction et le schéma qui la représente.

L'intrus est dans la case restante. Il faudra le noter sur la carte-réponse.

Les fractions			A1
	$\frac{3}{5}$	$\frac{1}{5}$	
$\frac{2}{5}$			$\frac{1}{2}$
	$\frac{1}{4}$		
$\frac{1}{3}$	$\frac{2}{3}$		$\frac{4}{3}$

Les fractions			A1
	$\frac{3}{5}$	$\frac{1}{5}$	
$\frac{2}{5}$			$\frac{1}{2}$
	$\frac{1}{4}$		
$\frac{1}{3}$	$\frac{2}{3}$		$\frac{4}{3}$

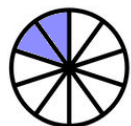
Les fractions			A2
		$\frac{3}{5}$	$\frac{3}{8}$
	$\frac{2}{2}$	$\frac{6}{10}$	
		$\frac{1}{5}$	$\frac{2}{6}$
$\frac{2}{5}$	$\frac{1}{4}$		

Les fractions

A3

Les fractions

		6	
5	1		3
8	2		10
1		4	4
3		6	8
	2		
	5		



$$\frac{7}{10}$$



$$\frac{5}{6}$$



$$\frac{4}{8}$$

$$\frac{2}{10}$$

$$\frac{2}{3}$$

$$\frac{9}{10}$$



$$\frac{4}{10}$$

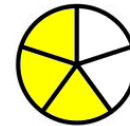


Les fractions

A4

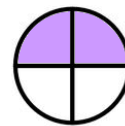
Les fractions

		6	
5	1		3
8	2		10
1		4	4
3		6	8
	2		
	5		



$$\frac{2}{4}$$

$$\frac{2}{5}$$



$$\frac{3}{4}$$



$$\frac{8}{8}$$

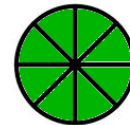


$$\frac{6}{10}$$



$$\frac{3}{5}$$

$$\frac{3}{8}$$



Les fractions

A5

Les fractions

		6	
5	1		3
8	2		10
1		4	4
3		6	8
	2		
	5		



$$\frac{6}{6}$$



$$\frac{5}{8}$$

$$\frac{1}{2}$$



$$\frac{3}{10}$$

$$\frac{1}{3}$$



$$\frac{4}{6}$$

$$\frac{4}{8}$$



$$\frac{2}{5}$$



Les fractions

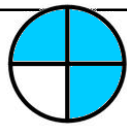
A6

Les fractions

		6	
5	1		3
8	2		10
1		4	4
3		6	8
	2		
	5		

$$\frac{3}{4}$$

$$\frac{5}{8}$$



$$\frac{2}{3}$$



$$\frac{1}{4}$$

$$\frac{5}{5}$$



$$\frac{1}{6}$$



$$\frac{3}{5}$$



$$\frac{2}{6}$$

Les fractions

A7



$$\frac{4}{8}$$



$$\frac{2}{5}$$

$$\frac{2}{10}$$



$$\frac{7}{10}$$

$$\frac{3}{10}$$



$$\frac{5}{10}$$

$$\frac{5}{6}$$



Les fractions

A8



$$\frac{9}{10}$$




$$\frac{4}{10}$$

$$\frac{3}{3}$$



$$\frac{6}{10}$$



$$\frac{2}{4}$$

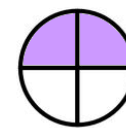
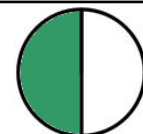


$$\frac{1}{2}$$

$$\frac{1}{3}$$



$$\frac{4}{5}$$



Les fractions

A9



$$\frac{1}{3}$$



$$\frac{6}{8}$$



$$\frac{2}{3}$$

$$\frac{5}{6}$$

$$\frac{5}{8}$$

$$\frac{2}{8}$$



$$\frac{1}{5}$$



$$\frac{1}{4}$$



Les fractions

A10



$$\frac{10}{10}$$

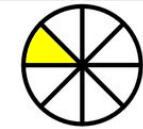
$$\frac{2}{5}$$



$$\frac{2}{3}$$

$$\frac{3}{8}$$

$$\frac{7}{8}$$



$$\frac{1}{8}$$



$$\frac{3}{6}$$

Cartes réponses des élèves



Les fractions

A1	A2	A3	A4	A5
A6	A7	A8	A9	A10



Les fractions

A1	A2	A3	A4	A5
A6	A7	A8	A9	A10



Les fractions

A1	A2	A3	A4	A5
A6	A7	A8	A9	A10



Les fractions

A1	A2	A3	A4	A5
A6	A7	A8	A9	A10